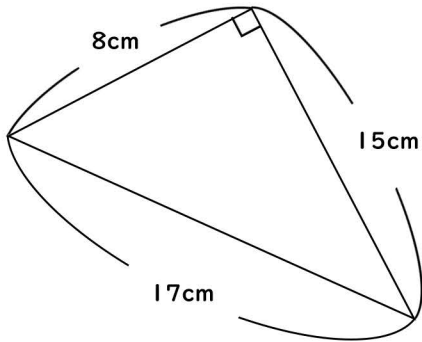


面積

③

次の三角形の面積を求めましょう

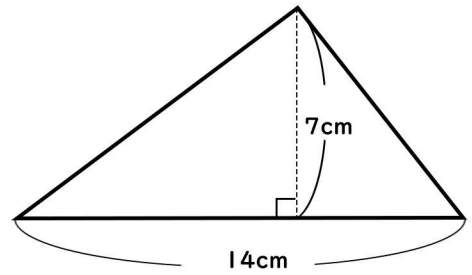
(1)



$$8 \times 15 \div 2 = 60$$

60cm²

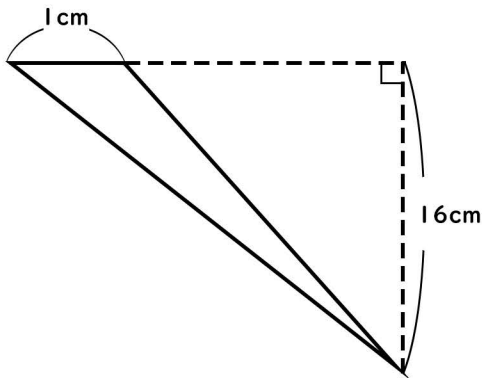
(2)



$$14 \times 7 \div 2 = 49$$

49cm²

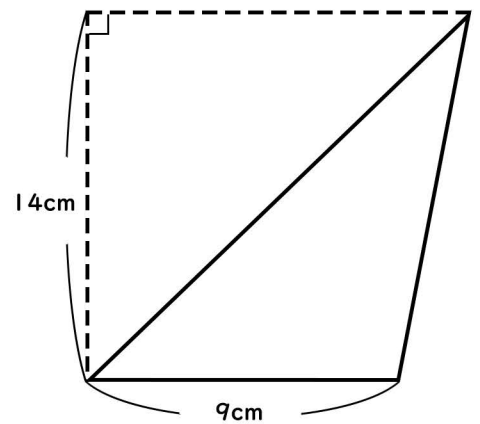
(3)



$$1 \times 16 \div 2 = 8$$

8cm²

(4)



$$9 \times 14 \div 2 = 63$$

63cm²