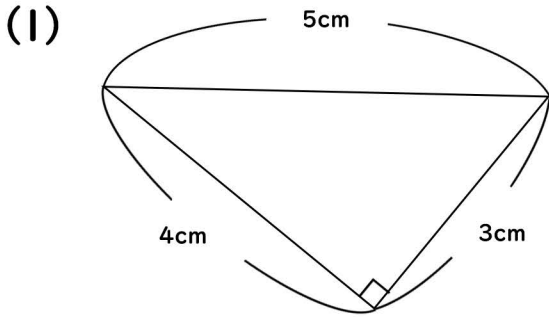


面積

④

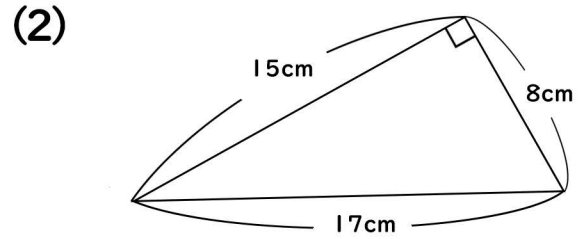
名前

次の三角形の面積を求めましょう



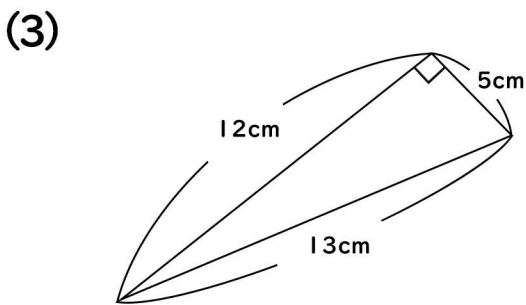
$$3 \times 4 \div 2 = 6$$

6cm^2



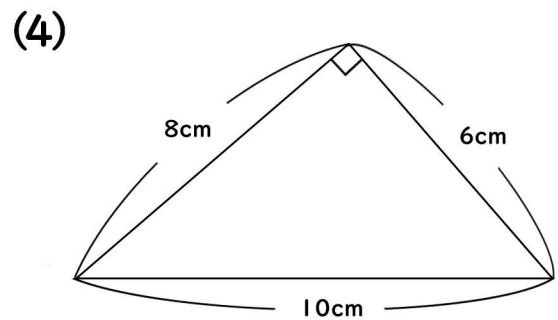
$$8 \times 15 \div 2 = 60$$

60cm^2



$$5 \times 12 \div 2 = 30$$

30cm^2



$$8 \times 6 \div 2 = 24$$

24cm^2